



INDIAN SCHOOL NIZWA - WORKSHEET

MATHEMATICS

CH: 2 NUMBERS FROM 1 TO 9


Name: _____

Date: _____


Class: I Sec: __

Count the objects, make groups and circle the number of objects. One has been done for you :

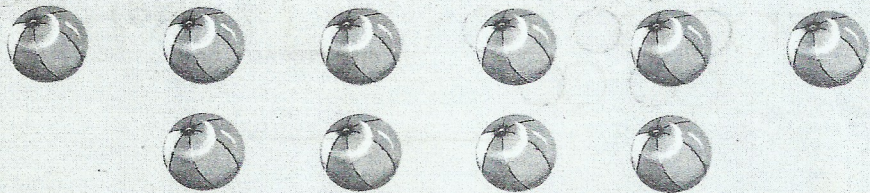
(a) 8 Stars



(b) 4 Flowers



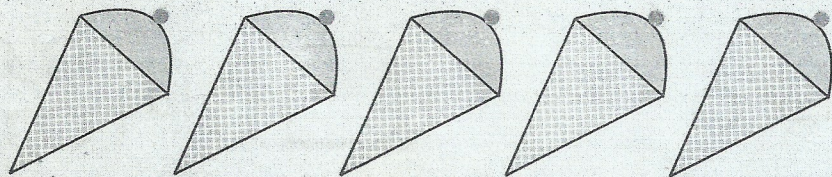
(c) 6 Balls




(d) 5 Apples



(e) 3 Ice cream cones



(f) 7 Fish





INDIAN SCHOOL NIZWA - WORKSHEET

Write the number after:

a) 5 _____

b) 7 _____

c) 3 _____

d) 6 _____

e) 2 _____

f) 4 _____